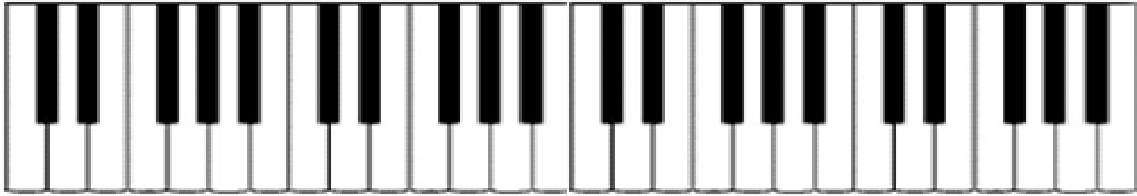


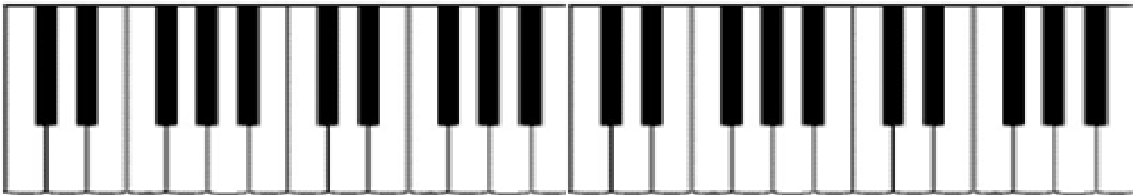
Lesson 18: Musical Notation - Flats

www.epianostudio.com

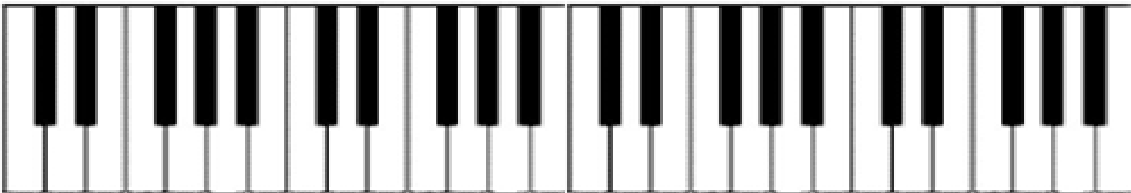
1. Color in or circle all of the B flat keys on the keyboard below. (Hint: there are 4)



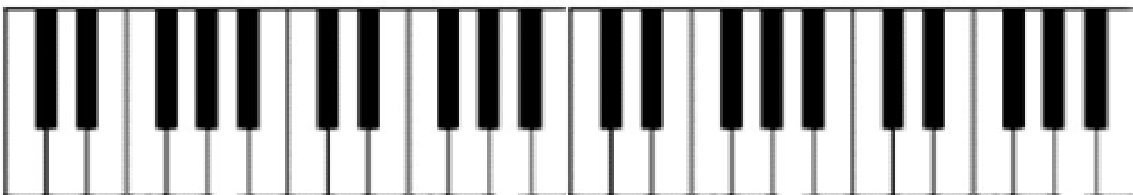
2. Color in or circle all of the E flat keys on the keyboard below



3. Color in or circle all of the A flat keys on the keyboard below



4. Color in or circle all of the f flat keys on the keyboard below (Hint: F flat is located on a white key)



5. What other name is F flat called? _____

6. What other name is C flat called? _____

7. In the music below, make all of the B's and E's, and A's flat

Piano

The musical score is for a piano piece in 4/4 time. It features two staves. The treble staff begins with a treble clef and a 4/4 time signature. The notes in the treble staff are: G4 (quarter), A4 (quarter), B4 (quarter), C5 (quarter), B4 (quarter), A4 (quarter), G4 (quarter), F4 (quarter), E4 (quarter), D4 (quarter), and C4 (quarter). The bass staff begins with a bass clef and a 4/4 time signature. It contains six whole notes: G2, F2, E2, D2, C2, and B1.